



King



Queen



Bishop



Knight



Rook




Pawn

Name _____ Grade _____ Score _____

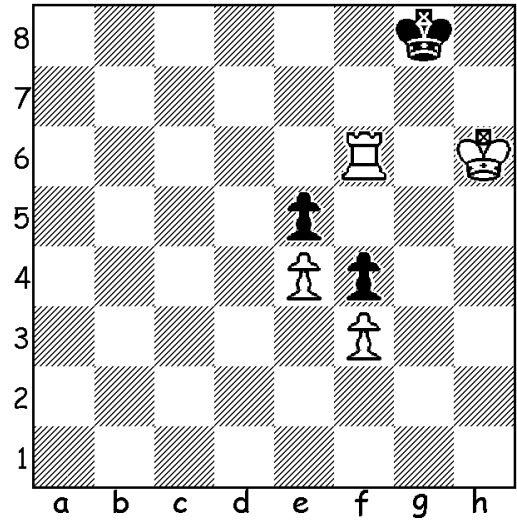
Using chess notation, show how white can force checkmate in two moves.

1.



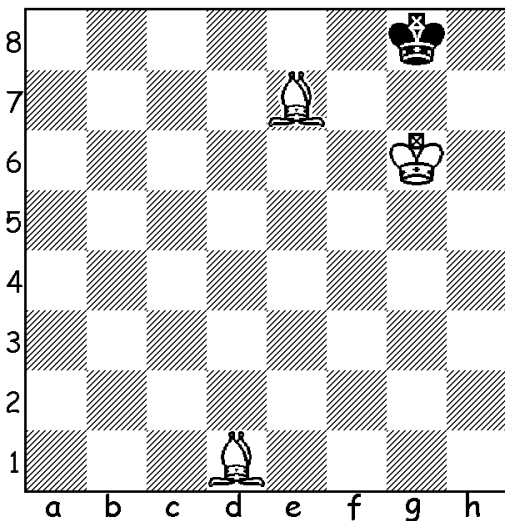
| | |
|-----|--|
| 1.W | |
| 1.B | |
| 2.W | |

2.




| | |
|-----|--|
| 1.W | |
| 1.B | |
| 2.W | |

3.



| | |
|-----|--|
| 1.W | |
| 1.B | |
| 2.W | |


4.



| | |
|-----|--|
| 1.W | |
| 1.B | |
| 2.W | |

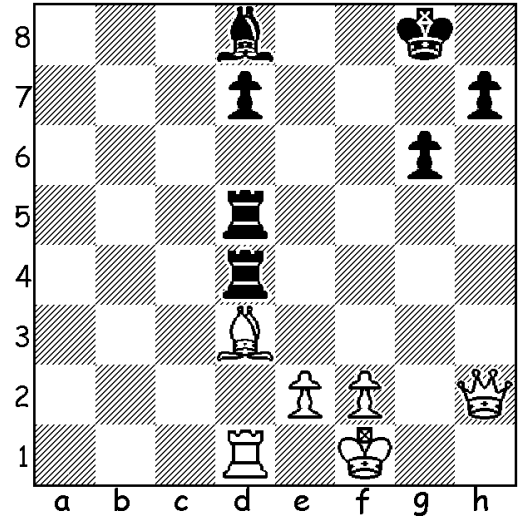
Use chess notation to show the moves that enable white to win material in two moves.

5.



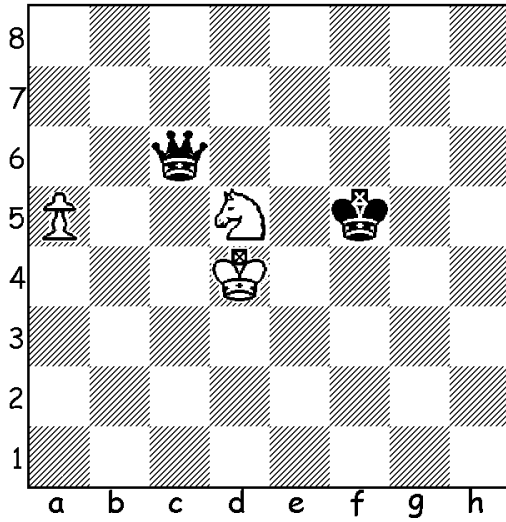
| | |
|-----|--|
| 1.W | |
| 1.B | |
| 2.W | |

6.



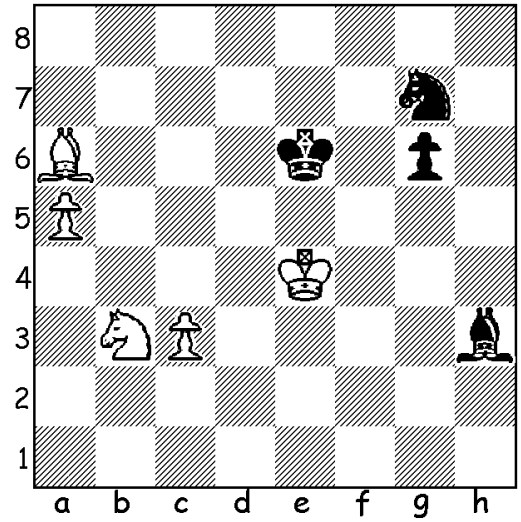
| | |
|-----|--|
| 1.W | |
| 1.B | |
| 2.W | |

7.



| | |
|-----|--|
| 1.W | |
| 1.B | |
| 2.W | |

8.



| | |
|-----|--|
| 1.W | |
| 1.B | |
| 2.W | |